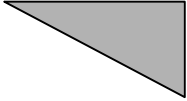

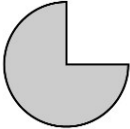



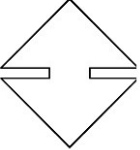





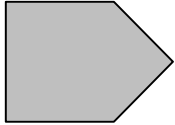

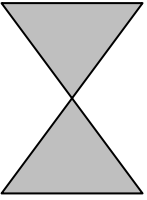
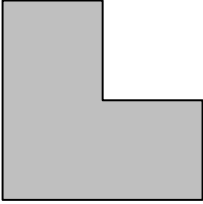



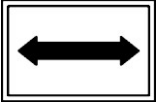






1. 下面哪些是線對稱圖形？在□內打✓。

- |   |   |   |
|---|---|---|
| (1)   | (2)   | (3)   |
|    |    |   |
| <input type="checkbox"/>  | <input type="checkbox"/>  | <input type="checkbox"/>  |
| (4)   | (5)   | (6)   |
|    |    |   |
| <input type="checkbox"/>  | <input type="checkbox"/>  | <input type="checkbox"/>  |
| (7)   | (8)   | (9)   |
|    |    |   |
| <input type="checkbox"/>  | <input type="checkbox"/>  | <input type="checkbox"/>  |
| (10)  | (11)  | (12)  |
|  |  |  |
| <input type="checkbox"/>  | <input type="checkbox"/>  | <input type="checkbox"/>  |

2. 畫出下面線對稱圖形的所有對稱軸。

- |   |   |   |
|---|---|---|
| (1)   | (2)   | (3)   |
|    |    |    |
| (4)   | (5)   | (6)   |
|    |    |    |
| (7)   | (8)   | (9)   |
|   |  |   |
| (10)  | (11)  | (12)  |
|  |  |  |

第 10 單元 線對稱圖形 10-1 認識線對稱圖形

姓名：\_\_\_\_\_